

**Test:** Primary 4 Maths Term 4 (ACS) 2020

**Points:** 85 points

**Name:** \_\_\_\_\_

**Score:** \_\_\_\_\_

**Date:** \_\_\_\_\_

**Signature:** \_\_\_\_\_

Select multiple choice answers with a cross or tick:

- Only select one answer
- Can select multiple answers

**Question 1 of 44**

Primary 4 Math (Term 4) 2 pts

**Section A (30 marks)**

44 thousands and 7 tens is the same as \_\_\_\_\_.

- A) 44 770
- B) 44 700
- C) 44 070
- D) 44 007

**Question 2 of 44**

Primary 4 Math (Term 4) 2 pts

25 784 rounded off to the nearest hundred is \_\_\_\_\_

- A) 25 700
- B) 25 780
- C) 25 800
- D) 26 000

**Question 3 of 44**

Primary 4 Math (Term 4) 2 pts

Which number below is 1.4 less than 5.79?

- A) 7.19
- B) 6.83
- C) 5.65
- D) 4.39

**Question 4 of 44**

Primary 4 Math (Term 4) 2 pts

Arrange the following decimals from the smallest to the greatest.

2.027, 2.207, 2.702, 2.072

- 
- A) 2.027,2.072,2.207,2.702
- B) 2.072,2.207,2.027,2.702
- C) 2.072,2.027,2.207,2.702
- D) 2.027,2.207,2.072,2..702

**Question 5 of 44**

Primary 4 Math (Term 4) 2 pts

Express  $\frac{54}{100}$  as a decimal.

- 
- A) 0.054
- B) 0.504
- C) 0.540
- D) 5.400

**Question 6 of 44**

Primary 4 Math (Term 4) 2 pts

What is the missing number in the box?

$$9.16 = 9 \frac{\boxed{?}}{50}$$

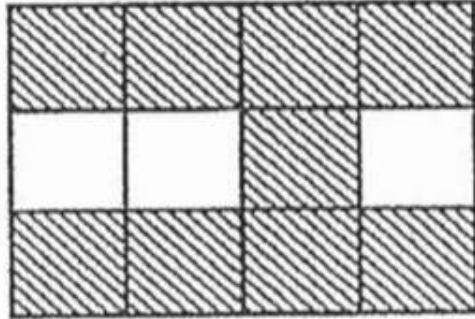
- 
- A) 32
- B) 16
- C) 12
- D) 8

## Question 7 of 44

Primary 4 Math (Term 4)

2 pts

The figure shown below is made up of 12 identical squares.  
What fraction of the figure is shaded?

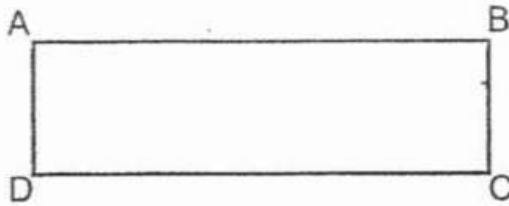


- A)  $\frac{1}{4}$
- B)  $\frac{1}{3}$
- C)  $\frac{1}{2}$
- D)  $\frac{3}{4}$

## Question 8 of 44

Primary 4 Math (Term 4) 2 pts

ABCD is a rectangle.



Which of the following statement about the rectangle ABCD is correct?

- A) AB is perpendicular to CD
- B) AD is parallel to BC
- C) The length of AB is 4 times the length of BC
- D) There is only a pair of parallel sides

## Question 9 of 44

Primary 4 Math (Term 4) 2 pts

1.906 is the same as \_\_\_\_\_

- A)  $\frac{10}{10} + \frac{9}{10} + \frac{6}{1000}$
- B)  $\frac{10}{10} + \frac{9}{100} + \frac{6}{1000}$
- C)  $\frac{1}{10} + \frac{9}{10} + \frac{6}{10}$
- D)  $\frac{1}{10} + \frac{9}{100} + \frac{6}{1000}$

## Question 10 of 44

Primary 4 Math (Term 4) 2 pts

What is the missing number in the box?

$$7\frac{5}{9} = \frac{\boxed{?}}{9}$$

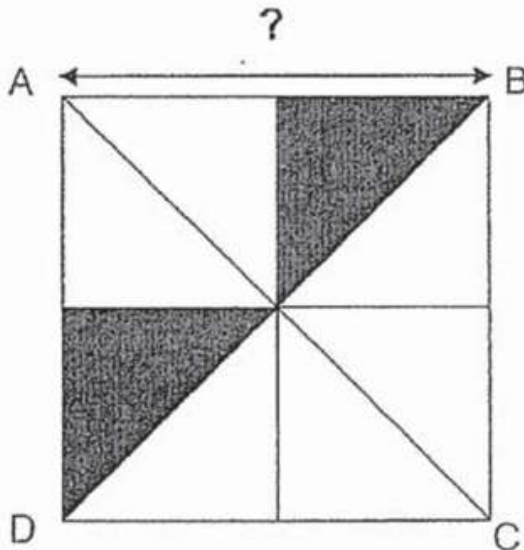
- A) 35
- B) 44
- C) 63
- D) 68

## Question 11 of 44

Primary 4 Math (Term 4) 2 pts

Square ABCD is made up of 8 identical triangles.

The area of one shaded triangle is  $50 \text{ m}^2$ . What is the length of AB?



- A) 25m
- B) 20m
- C) 10m
- D) 5m

**Question 12 of 44**

Primary 4 Math (Term 4) 2 pts

What is the difference between the 8th multiple of 7 and the 4th multiple of 8?

---

- A) 88
- B) 56
- C) 32
- D) 24

**Question 13 of 44**

Primary 4 Math (Term 4) 2 pts

Which one of the following letter has perpendicular lines?

---

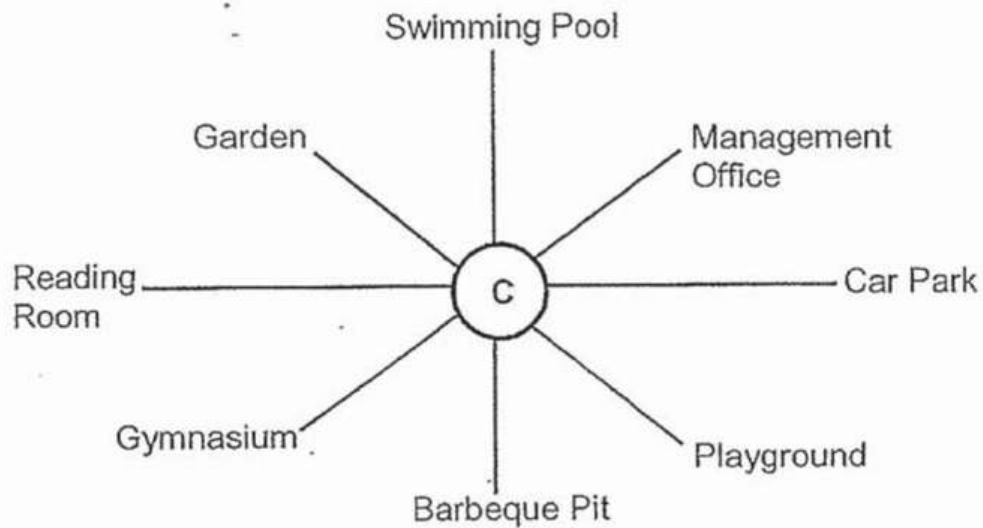
- A) W
- B) N
- C) F
- D) Z

**Question 14 of 44**

Primary 4 Math (Term 4)

2 pts

Matt is standing at the point marked **C** in the figure below. He is facing the Reading Room. In which direction would he be facing when he turns  $135^\circ$  anti-clockwise?



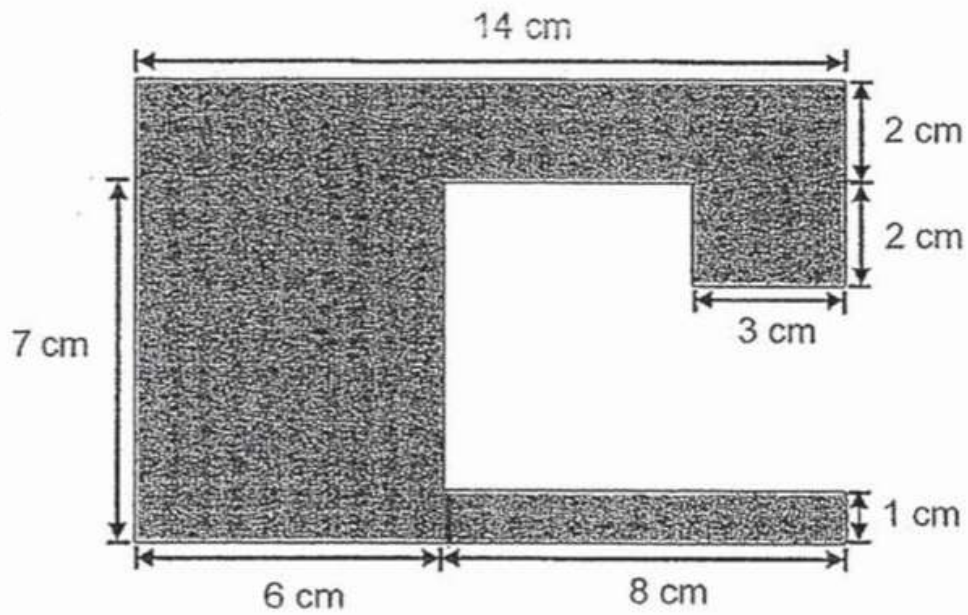
- A) Management Office
- B) Barbecue Pit
- C) Playground
- D) Car Park

**Question 15 of 44**

Primary 4 Math (Term 4)

2 pts

What is the area of the shaded figure?



- A) 126 cm<sup>2</sup>
- B) 98 cm<sup>2</sup>
- C) 84 cm<sup>2</sup>
- D) 42 cm<sup>2</sup>

**Question 16 of 44**

Primary 4 Math (Term 4)

2 pts

**Section B: (40 marks)**

Write seventy thousand and thirteen in figures.

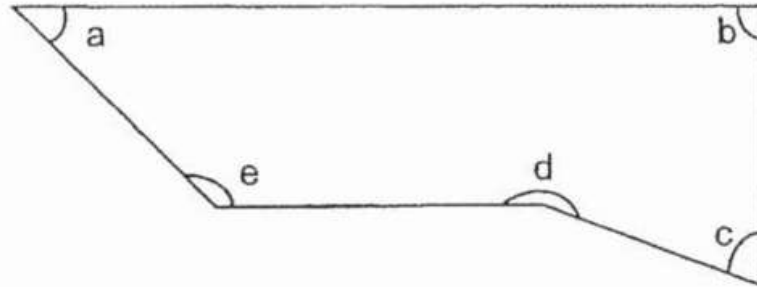


**Question 17 of 44**

Primary 4 Math (Term 4)

2 pts

In the figure, one of the angles is a right angle. Name the angle.



- A) a
- B) b
- C) c
- D) d
- E) e

**Question 18 of 44**

Primary 4 Math (Term 4)

2 pts

Find the value of  $6 \div 7$ . Round off your answer as a decimal to 2 decimal places.

**Question 19 of 44**

Primary 4 Math (Term 4)

2 pts

What is the remainder when 1276 is divided by 6?

**Question 20 of 44**

Primary 4 Math (Term 4)

2 pts

Some factors of 81 are 1, 9 and 81. What are the other two factors of 81?

\_\_\_\_, \_\_\_\_

**Question 21 of 44**

Primary 4 Math (Term 4)

1 pt

. Write  $\frac{32}{6}$  as a mixed number in its simplest form.

---

**Question 22 of 44**

Primary 4 Math (Term 4)

2 pts

The table below shows the favourite sport of Primary 4J pupils. Use the information provided in the table to answer questions 22 and 23.

Sport	Number of pupils
Basketball	18
Badminton	8
Football	?
Swimming	4
Tennis	7

There were 43 pupils in the class. How many pupils chose football as their favourite sport?

---

**Question 23 of 44**

Primary 4 Math (Term 4)

2 pts

Which sport was 2 times as popular as swimming?

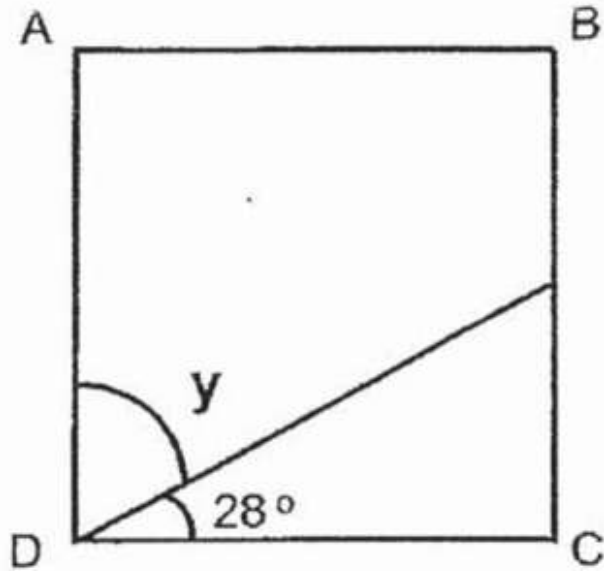
---

- A) Basketball
- B) Badminton
- C) Football
- D) Swimming
- E) Tennis

**Question 24 of 44**

Primary 4 Math (Term 4) 2 pts

ABCD is a rectangle. Find  $\angle y$ .

**Question 25 of 44**

Primary 4 Math (Term 4) 2 pts

Write the missing number in the number pattern below.

\_\_\_\_, 11 387, 10 137, 8887, 7637

**Question 26 of 44**

Primary 4 Math (Term 4) 2 pts

What is the first common multiple of 6 and 8?

**Question 27 of 44**

Primary 4 Math (Term 4) 2 pts

Elton took a bus to attend a friend's birthday party. The party lasted for 1h 45 min and ended at 16 30. If the bus ride to the friend's place was 22 minutes long, what time did Elton board the bus? Leave your answer in 24-hour clock format.

---

**Question 28 of 44**

Primary 4 Math (Term 4) 2 pts

What are the missing numerators?

$$\frac{\boxed{(a)}}{4} - \frac{\boxed{(b)}}{3} = \frac{1}{12}$$

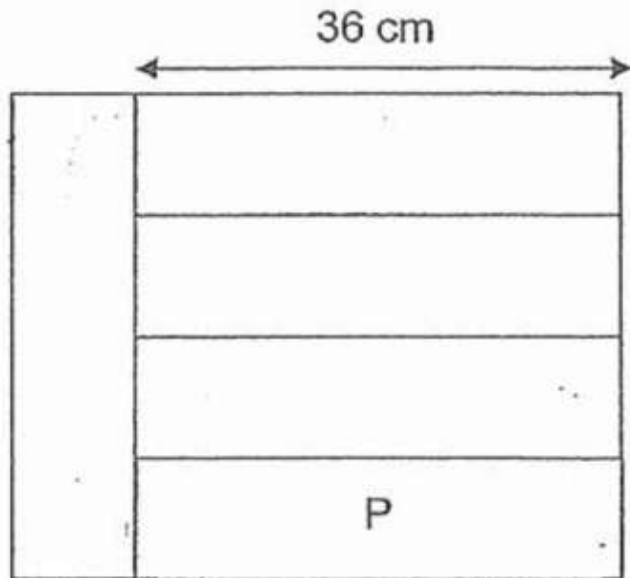
---

**Question 29 of 44**

Primary 4 Math (Term 4)

2 pts

The figure is made up of 5 identical rectangles.  
What is the area of rectangle P?

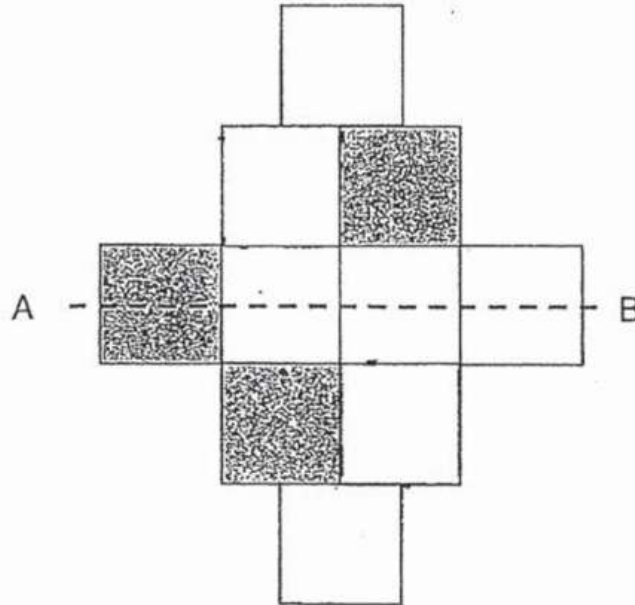


**Question 30 of 44**

Primary 4 Math (Term 4) 0 pts

In the figure below, the dotted line AB is the line of symmetry.

Shade two more unit squares on the figure below to complete the symmetric figure.



Please type "done" to proceed to the next question

---

**Question 31 of 44**

Primary 4 Math (Term 4) 2 pts

Mr Tan bought 18 computers for his office. The cost of each computer was \$976. How much did Mr Tan spend altogether?

---

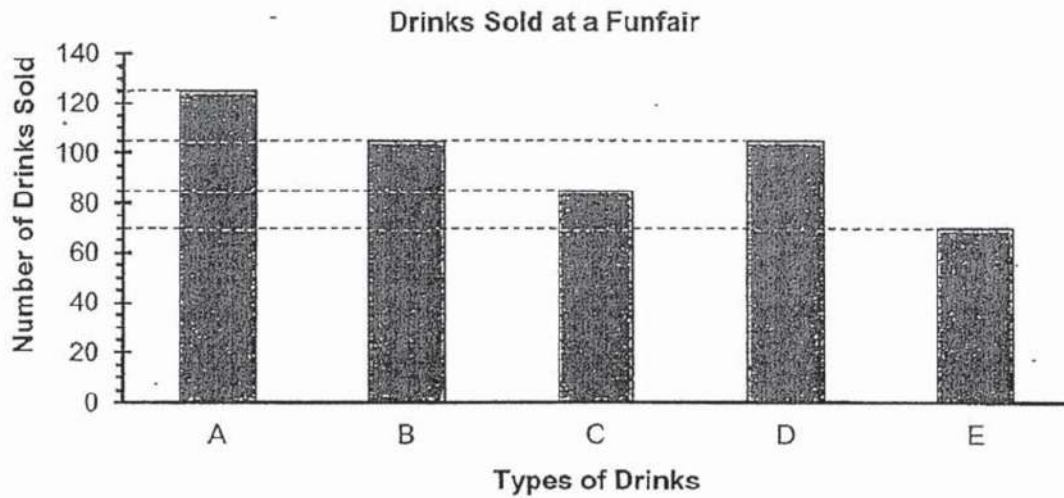
**Question 32 of 44**

Primary 4 Math (Term 4)

2 pts

Study the graph below carefully and answer questions 33, 34 and 35.

The bar graph below shows the number of drinks sold at a funfair.



There were \_\_\_\_\_ fewer drinks of Type C sold than Type A.

---

**Question 33 of 44**

Primary 4 Math (Term 4)

2 pts

What is the difference between the most popular and least popular drink sold?

---

**Question 34 of 44**

Primary 4 Math (Term 4)

2 pts

Each drink costs \$2. How much money was collected from selling Type B drinks at the funfair?

---

**Question 35 of 44**

Primary 4 Math (Term 4) 2 pts

Bob had 3 times as many stamps as Anna. They had 820 stamps altogether. Bob gave 234 stamps to Anna. How many stamps did Anna have in the end?

---

**Question 36 of 44**

Primary 4 Math (Term 4) 2 pts

Winnie had \$564. She spent  $\frac{1}{6}$  of her money on books and another \$158 on groceries. How much money had she left?

---

**Question 37 of 44**

Primary 4 Math (Term 4) 2 pts

Dana usually takes a bus from her home to school. If she leaves home at 06 10, she will reach school at 07 25. Last week, a new MRT line has opened and she can take the train directly from home to school instead. This will shorten her journey by 35 minutes.

a) How long does Dana take to go school by the new MRT line?

---

**Question 38 of 44**

Primary 4 Math (Term 4) 2 pts

b) Dana spent the next 6h 25min in school before dismissal. If Dana started school at 07 45, at what time was she dismissed from school? Give your answer in the 12h clock format.

---



**Question 39 of 44**

Primary 4 Math (Term 4) 2 pts

Andy had 1484 pencils and erasers. After he gave away  $\frac{4}{5}$  of the pencils and 248 erasers to Chloe, he had an equal number of pencils and erasers left.

a) How many pencils did Andy have in the end?

---

**Question 40 of 44**

Primary 4 Math (Term 4) 2 pts

b) Chloe packed the erasers that she received from Andy into packs of 8 and sold each pack at \$3. How much did she receive from selling the erasers?

---

**Question 41 of 44**

Primary 4 Math (Term 4) 2 pts

The total mass of 3 identical cans of sardine and 2 packets of flour was 8.1kg. The total mass of 5 such cans of sardine and 4 such packet of flour is 14.7kg. What is the mass of 10 cans of sardine and 10 packets of flour?

---

**Question 42 of 44**

Primary 4 Math (Term 4) 2 pts

Kelvin and Hannah had the same number of cards. When Kelvin gave away 2073 of his cards and Hannah gave 367 of her cards, Hannah had five times as many cards as Kelvin. How many cards did each of them have at first?

---

**Question 43 of 44**

Primary 4 Math (Term 4) 2 pts

Vincent had some money. He wanted to buy 5 movie tickets but he was short of \$35. Instead, he bought 2 movie tickets and had \$2.50 left. How much money did he have at first?

---

## Question 44 of 44

Primary 4 Math (Term 4) 2 pts

The figure below, not drawn to scale, is made up of 2 squares and 2 rectangles.  
What is the area of Rectangle A?

