

Test: Primary 4 Maths (Term 4) - Tao Nan

Points: 90 points

Name: _____

Score: _____

Date: _____

Signature: _____

Select multiple choice answers with a cross or tick:

Only select one answer

Can select multiple answers

Question 1 of 46

Primary 4 Math (Term 4) 2 pts

Section A (20 marks)

In which of the following numbers does the digit 8 stand for 800?

A) 2586

B) 5268


C) 6825

D) 8652

Question 2 of 46

Primary 4 Math (Term 4) 2 pts

The figure shown is made up of identical squares. What fraction of the figure is shaded?



A) $\frac{5}{8}$

B) $\frac{4}{9}$

C) $\frac{4}{5}$

D) $\frac{5}{9}$

Question 3 of 46

Primary 4 Math (Term 4) 2 pts

What is the number when 882.62 is rounded to 1 decimal place?

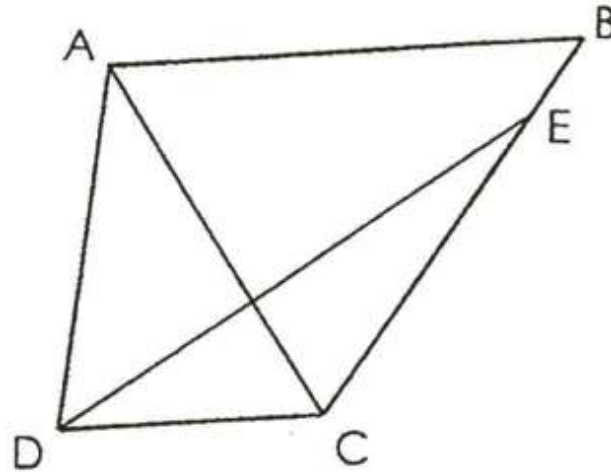
A) 882.0

B) 882.6

C) 882.7

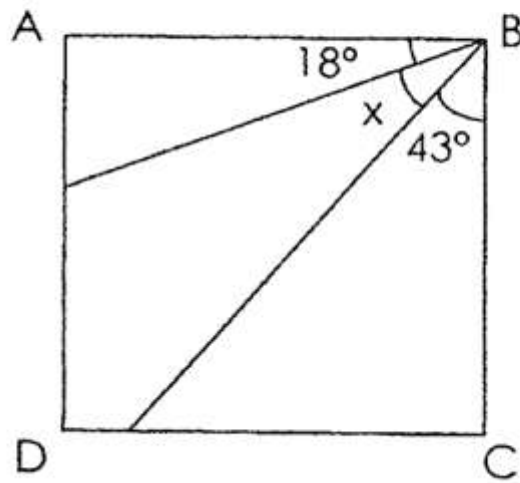
D) 883.0

One of the lines in the figure is parallel to DC.
Which line is parallel to DC?



-
- A) AB
 - B) DE
 - C) AC
 - D) DA

In the figure shown, ABCD is a square. Find $\angle x$.



-
- A) 29°
 B) 47°
 C) 61°
 D) 72°

Arrange the following fractions from the greatest to the smallest.

$$\frac{1}{4}, \quad \frac{5}{6}, \quad \frac{7}{12}$$

A)

(greatest)

(smallest)

$$\frac{5}{6}$$

$$\frac{1}{4}$$

$$\frac{7}{12}$$

B)

$$\frac{7}{12}$$

$$\frac{5}{6}$$

$$\frac{1}{4}$$

C)

$$\frac{1}{4}$$

$$\frac{5}{6}$$

$$\frac{7}{12}$$

D)

$$\frac{5}{6}$$

$$\frac{7}{12}$$

$$\frac{1}{4}$$

Bala left school and took 40 min to walk home. He reached home at 14 30. What time did he leave school?

A) 15 10

B) 14 50

C) 14 00

D) 13 50

Question 8 of 46

Primary 4 Math (Term 4) 2 pts

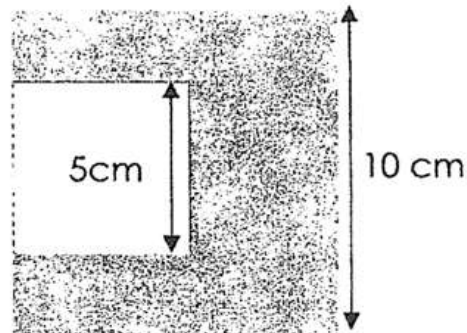
Mr Chang sold 4 times as many curry puffs on Sunday than on Monday. If he sold 1608 curry puffs on Sunday, how many curry puffs did he sell on Monday?

- A) 42
- B) 402
- C) 6402
- D) 6432

Question 9 of 46

Primary 4 Math (Term 4) 2 pts

A small square of side 5 cm is cut out from a big square of side 10 cm as shown below. What is the perimeter of the shaded figure?



- A) 35 cm
- B) 45 cm
- C) 50 cm
- D) 75 cm

Question 10 of 46

Primary 4 Math (Term 4) 2 pts

Jun Jie spent $\frac{3}{5}$ of his money and had \$210 left.

How much money did he have at first?

-
- A) \$70
 B) \$105
 C) \$350
 D) \$525

Question 11 of 46

Primary 4 Math (Term 4) 2 pts

Section B (40marks)

$$49\,703 = 40\,000 + 9000 + \underline{\quad} + 3$$

What is the missing number?

Question 12 of 46

Primary 4 Math (Term 4) 2 pts

Match the options below from the greatest to the smallest:

849, 984, 948, 498

1. [] 984

A. Great

2. [] 948

B. Greatest

3. [] 849

C. Small

4. [] 498

D. Smallest

Question 13 of 46

Primary 4 Math (Term 4)

2 pts

$$\frac{3}{4} + \frac{1}{8} = \underline{\hspace{2cm}}$$

Question 14 of 46

Primary 4 Math (Term 4)

2 pts

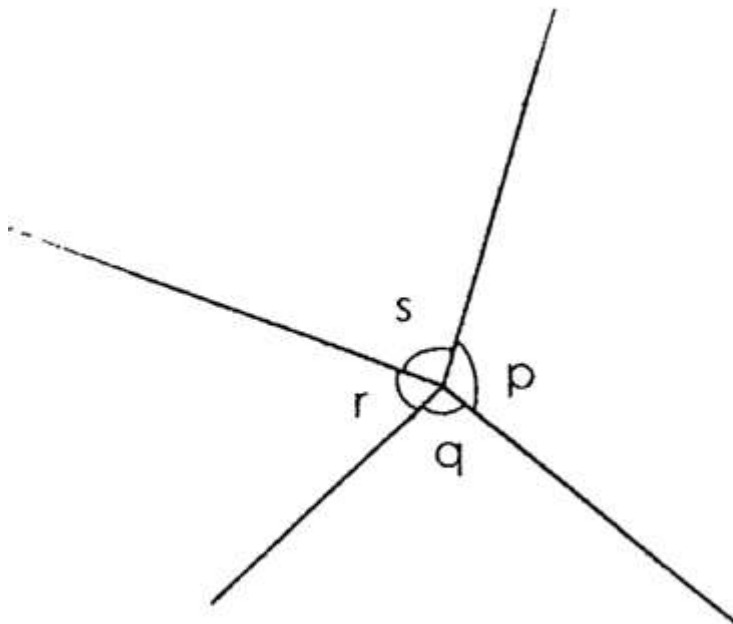
$$8.7 - 0.89 = \underline{\hspace{2cm}}$$

Question 15 of 46

Primary 4 Math (Term 4)

2 pts

In the figure below, name the smallest angle.



Question 16 of 46

Primary 4 Math (Term 4) 2 pts

Some factors of 32 are 1, 2, 4 and 32. What are the other two factors of 32?

Question 17 of 46

Primary 4 Math (Term 4) 2 pts

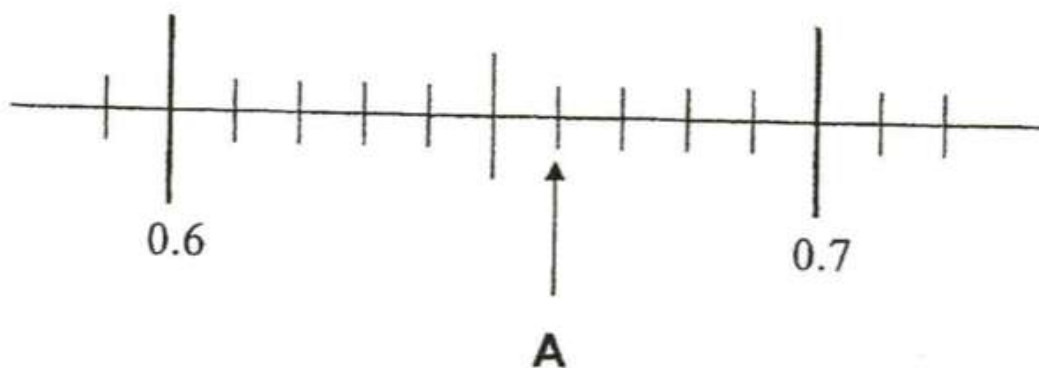
$$\frac{3}{4} = \frac{9}{\square}$$

What is the missing number in the \square above ?

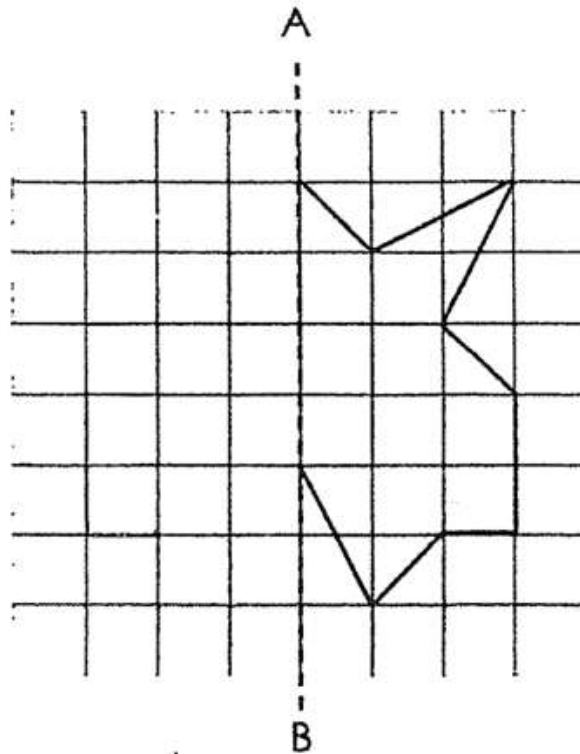
Question 18 of 46

Primary 4 Math (Term 4) 2 pts

Write the decimal represented by A.

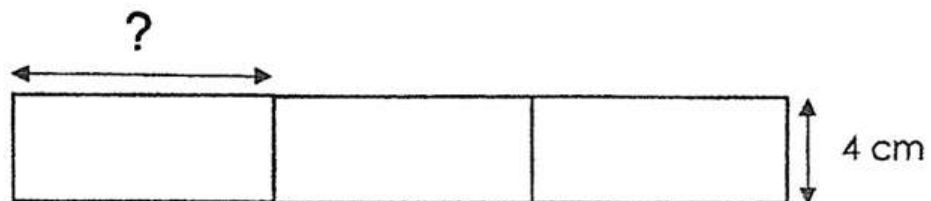


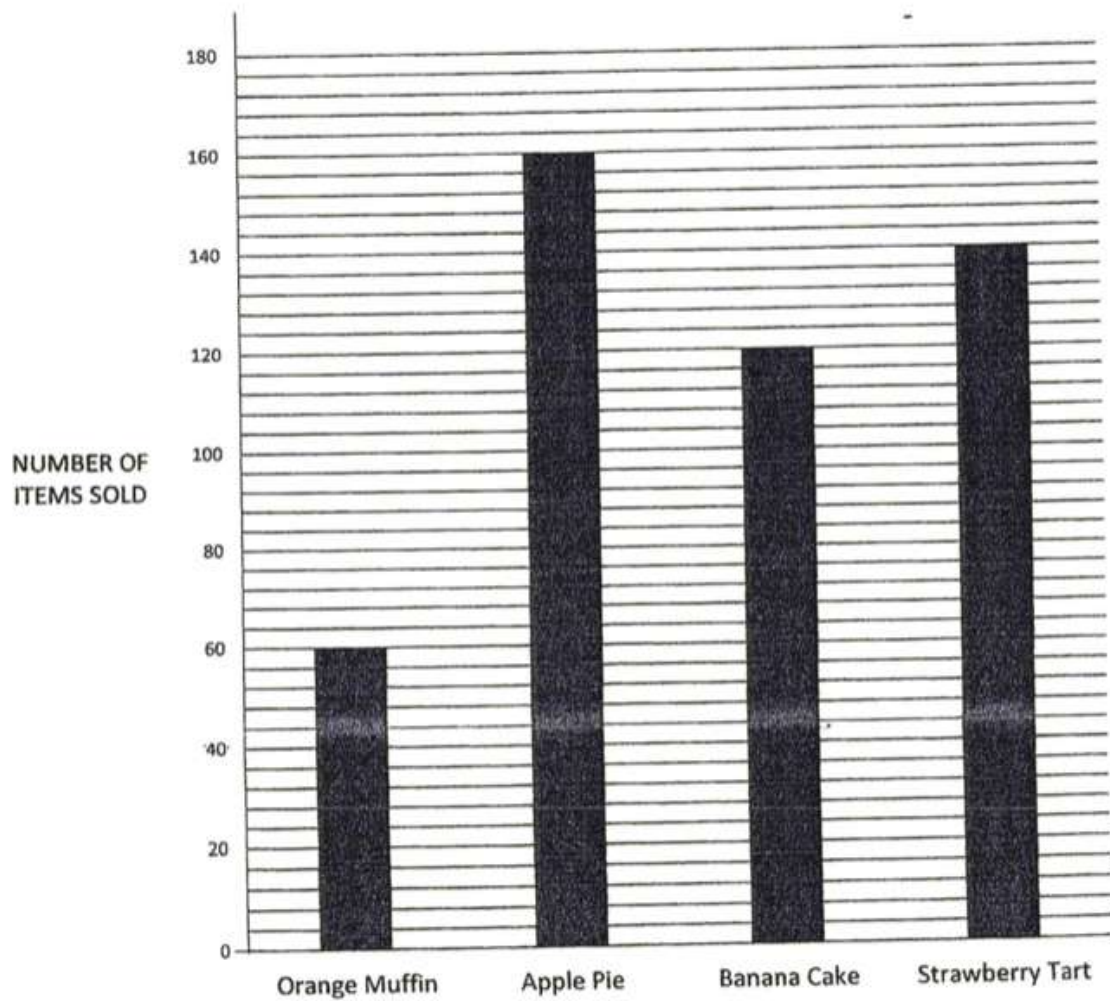
Complete the figure using Line AB as the line of symmetry.



Please type "done" to proceed to the next question

The figure is made up of 3 identical rectangles.
 The total area is 108 cm^2 .
 Find the length of one rectangle.





What was the most popular item sold at the bakery?

- A) Orange Muffin
- B) Apple Pie
- C) Banana Cake
- D) Strawberry Tart

A total of ___ banana cakes and orange muffins was sold.

Question 23 of 46

Primary 4 Math (Term 4) 2 pts

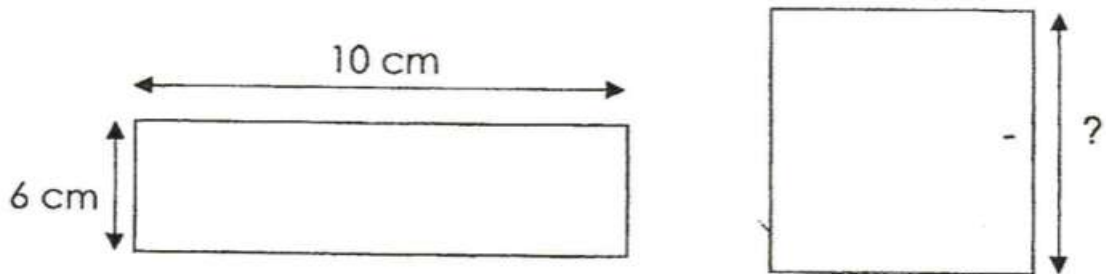
How many fewer strawberry tarts than apple pies were sold?

Question 24 of 46

Primary 4 Math (Term 4) 2 pts

The square has the same perimeter as the rectangle.

What is the length of the square?

**Question 25 of 46**

Primary 4 Math (Term 4) 2 pts

A bus captain drives 5.33km a day. What is the total distance he travels in 6 days? Correct your answer to 1 decimal place

Question 26 of 46

Primary 4 Math (Term 4) 2 pts

Jane bought 7 cupcakes. She gave the cashier \$15 and received a two-dollar note, 4 twenty-cent coins and 2 fifty-cent coins as change. How much did each cupcake cost?

Question 27 of 46

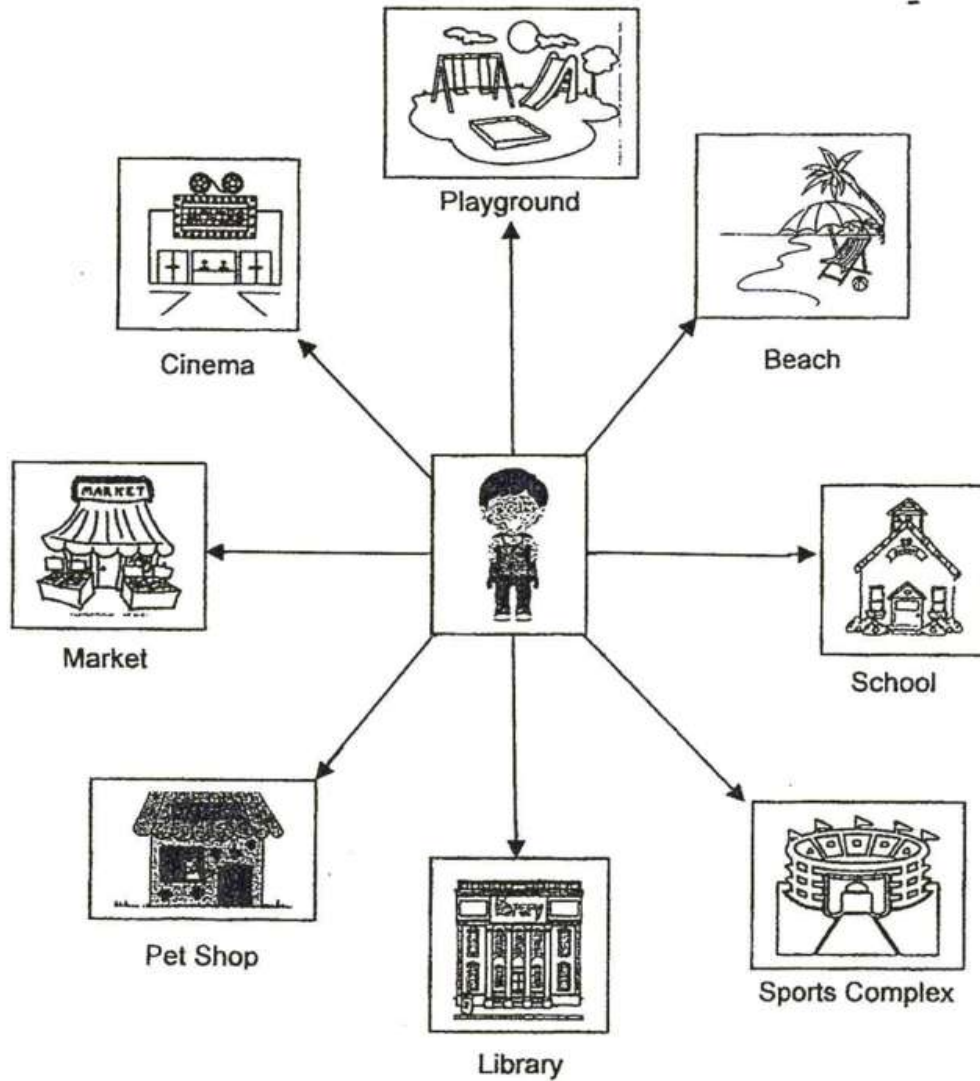
Primary 4 Math (Term 4) 2 pts

The sum of two numbers is 2071. The difference between them is 385. Find the greater number.

John is facing the library. He makes a 270° clockwise turn.

Then he makes a $\frac{1}{2}$ -turn in an anti-clockwise direction.

Which place is he facing now?



Question 29 of 46

Primary 4 Math (Term 4) 2 pts

Mr Bala packed 3.5kg of nuts into 1 big bag and 4 small bags. The big bag contained 0.9kg of nuts. How many grams of nuts. did each small bag contain?

Question 30 of 46

Primary 4 Math (Term 4) 4 pts

Mr Goh bought a watermelon and 6 mangoes for \$39.50. A watermelon cost \$1.35 more than a mango. How much did a mango cost?

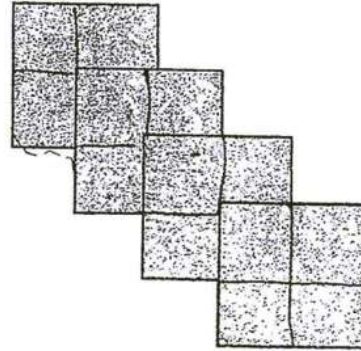
Question 31 of 46

Primary 4 Math (Term 4) 4 pts

A tank has a capacity of 6 litres. A bucket can hold 1L 25ML of water. Madam Aisha pours 4 such buckets of water into the tank. How many more litres of water are needed to fill the tank?

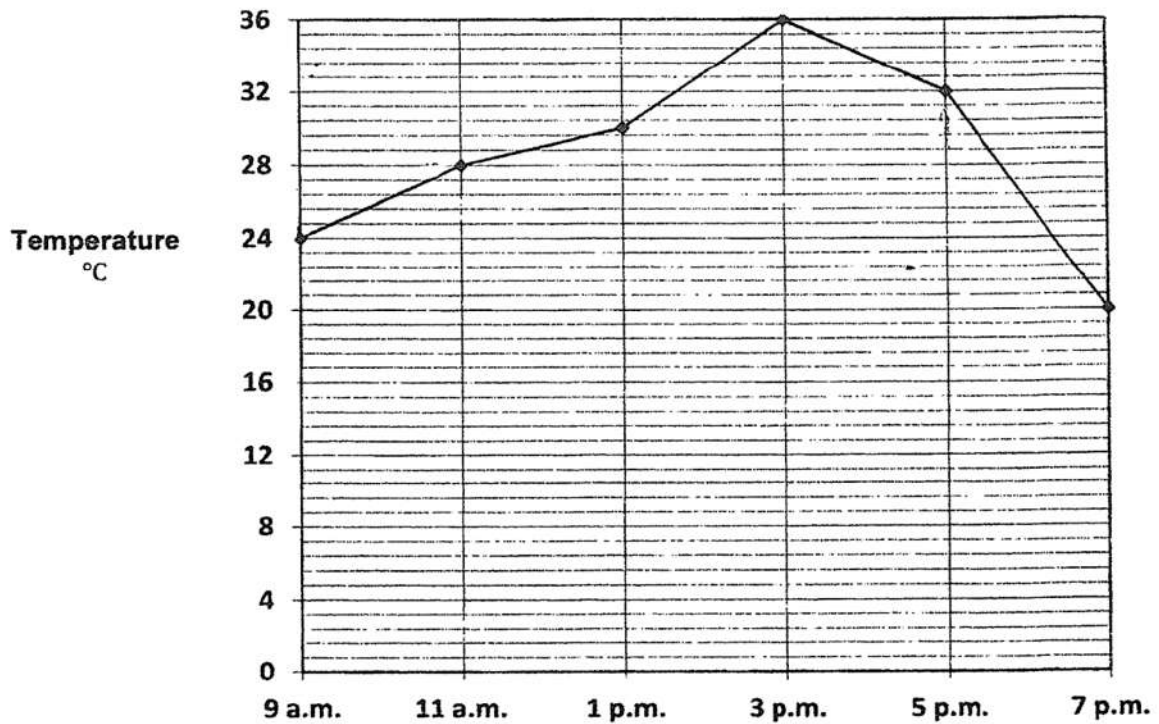
Four identical squares of length 6 m overlap each other as shown.
Each side of the square crosses another at the centre of the side of the square.

a) Find the area of the figure.



b) Find the perimeter of the figure.

The line graph shows the change in temperature between 9 a.m. and 7 p.m.



| What was the temperature recorded at 5 p.m.?

During which 2 hour period was the increase in temperature the greatest?

- A) 9am-11am
- B) 11am-1pm
- C) 1pm-3pm
- D) 5pm-7pm

What was the difference between the lowest temperature and the highest temperature recorded?

Question 37 of 46

Primary 4 Math (Term 4) 2 pts

Karen had \$50. She bought 6 pens at \$1.85 each. After buying 2 identical files, she had \$21 left.

How much did Karen pay for 6 pens?

Question 38 of 46

Primary 4 Math (Term 4) 2 pts

How much did each file cost?

Question 39 of 46

Primary 4 Math (Term 4) 4 pts

Mr Lim is 34 years old and his son is 2 years old. In how many years' time will their ages add up to 50 years?

Question 40 of 46

Primary 4 Math (Term 4) 4 pts

Mrs Zara baked 2000 cookies. She packed them into packets of 2 cookies and 6 cookies. There was an equal number of packets of 2 cookies and 6 cookies. How many packets of cookies did she pack altogether?

Question 41 of 46

Primary 4 Math (Term 4) 0 pts

There were some buttons in a box.

$\frac{2}{3}$ of the buttons were yellow, $\frac{1}{8}$ of the them were red and the rest were blue.

There were 18 more blue buttons than red buttons.

- a) What fraction of the buttons were blue?
 - b) How many buttons were in the box?
-

Question 42 of 46

Primary 4 Math (Term 4) 2 pts

Lucas had some cards.

If he gave 7 cards to each of his friends, he would be short of 4 cards.

If he gave 6 cards to each of them, he would have 3 cards left.

- a) How many cards did Lucas have?
-

Question 43 of 46

Primary 4 Math (Term 4) 2 pts

How many friends did Lucas give the cards to?

1. Study the pattern below.



Figure 1




Figure 2





Figure 3

(a) Complete the table.

Figure	1	2	3
Number of Squares	9		

(b) Draw and colour **Figure 4** in the square grid below.



"done" to proceed to the next question

Please type

Which figure has 93 squares?